

Midterm Exam No. 02 (2021 Fall)

PHYS 205B: University Physics

Date: 2021 Oct 5

(Name)

(Signature)

Instructions

1. Seating direction: Please be seated on seats with seat-numbers divisible by 4.
2. Total time = 75 minutes.
3. There are 5 conceptual questions and 5 problems in this exam.
4. Equation sheet is provided separately.
5. To be considered for partial credit you need to show your work in detail and organize it clearly.
6. A simple calculator (with trigonometric functions) is allowed.
7. Use of mobile phones is strictly prohibited. It should stay out of reach during the exam.

1. (5 points.) The electric potential on the surface of a solid perfectly conducting sphere of radius R with charge Q on it is

$$\frac{1}{4\pi\epsilon_0} \frac{Q}{R}. \quad (1)$$

What is the electric potential at a distance $R/2$ from the center on this sphere?

2. (5 points.) What is an equipotential surface? Draw the equipotential surfaces between two parallel plates with equal and opposite charge per unit area on the two plates.

3. (5 points.) Determine the total electrical energy required to assemble two identical positive charges $+Q$ at two corners and one negative charge $-Q$ at the third corner of an equilateral triangle of length L . Assume that the charges are brought from infinity.

4. **(5 points.)** The electric potentials at the two ends of a $1.5\text{ k}\Omega$ resistor in a circuit is measured to be 6.0 V and 1.5 V . Determine the current passing through the resistor.

5. (**5 points.**) A zero-watt bulb consumes about 12 watts of power. In early days this was too low power and it came to be known as zero-watt bulb. How much energy (in Joules) is consumed by a zero-watt bulb in one year if it is left on continuously.

6. (10 points.) Four charges $q_1 = q$, $q_2 = -q$, $q_3 = -q$, and $q_4 = q$, are placed at the corners of a square of side L , such that q_1 and q_4 are at diagonally opposite corners. Refer Figure 1. What is the electric potential difference between points a and c ?

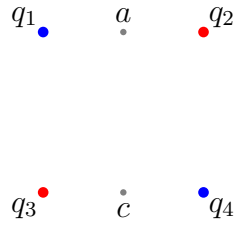


Figure 1: Problem 6

7. (10 points.) Determine the equivalent capacitance between points A and B in the circuit in Figure 2. Given $C_1 = 1.0 \text{ nF}$, $C_2 = 2.0 \text{ nF}$, $C_3 = 3.0 \mu\text{F}$, and $C_4 = 4.0 \mu\text{F}$. Caution: Note that C_1 and C_2 are in nF while C_3 and C_4 are in μF . Report the answer with correct significant digits.

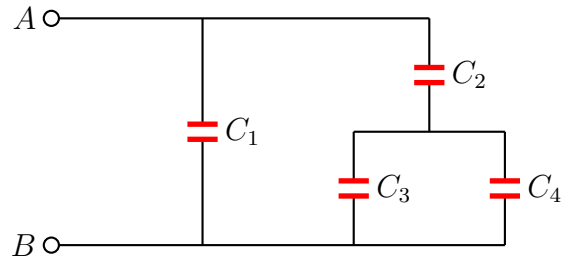


Figure 2: Problem 7

8. (10 points.) Consider the circuit in Figure 3 with $V_1 = 7.0\text{ V}$, $V_2 = 5.0\text{ V}$, $R_1 = 10.0\ \Omega$, $R_2 = 20.0\ \Omega$. For what resistance R_3 is the current in R_2 zero?

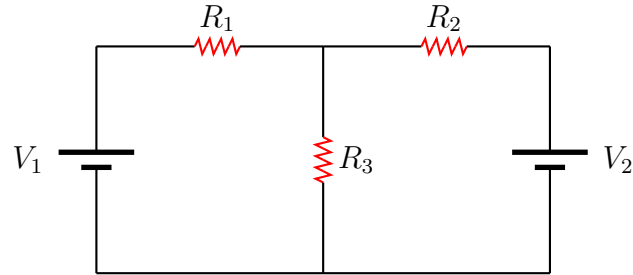


Figure 3: Problem 8

9. (10 points.) Consider the circuit in Figure 4 with $V_1 = 10.0\text{ V}$, $V_2 = 20.0\text{ V}$, $R_1 = 10.0\ \Omega$, $R_2 = 20.0\ \Omega$, $R_3 = 30.0\ \Omega$. Find the current through resistor R_1 .

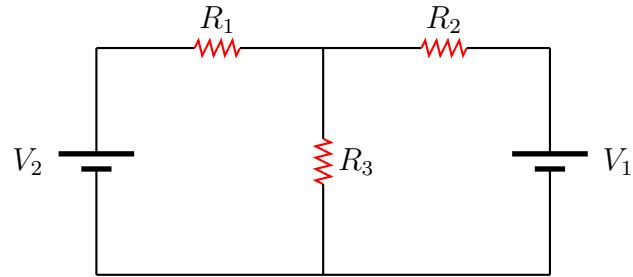


Figure 4: Problem 9

10. (10 points.) Consider the process of discharging the capacitor C through a resistor R . Refer Figure 5.

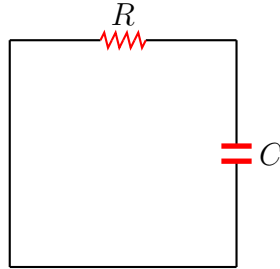


Figure 5: Problem 10

- (a) Using Kirchoff's law, write down the (differential) equation relating the current I in the circuit and the charge Q on the capacitor.
- (b) The solution to the equation in Question (10a) for the initial condition $Q(0) = Q_0$ is given by

$$Q(t) = Q_0 e^{-\frac{t}{RC}}. \quad (2)$$

How much time does it take to discharge the capacitor completely? How much time does it take to discharge the capacitor to half of the maximum value? Given $C = 10.0 \mu\text{F}$, $R = 30.0 \text{ k}\Omega$, and $Q_0 = 150 \mu\text{C}$.